





Lili et Léo veulent commander des billes sur Internet.  
Lili a besoin de 36 billes et Léo en veut 45.  
Ils ne peuvent remplir qu'un seul bon de commande.

Combien de billes Lili et Léo doivent-ils commander?



Je cherche.

$$36 + 45 =$$

Je réponds.

---

---

---

---

---

---

---








---

---

---

Calcule en t'aidant des dessins.

$$28 + 34 = \dots\dots\dots$$



$$13 + 24 = \dots\dots\dots$$

