

Ce que je sais faire en : calcul posé

Date

Ceinture blanche	Additions avec retenue	
Ceinture jaune	Soustractions sans retenue	
Ceinture orange	Soustractions avec retenue	
Ceinture verte	Additions et soustractions	
Ceinture bleue	Multiplication par un nombre à 1 chiffre	
Ceinture marron	Multiplication par un nombre à 2 chiffres	
Ceinture noire	Les 3 opérations	

Ce livret appartient à : _____





CEINTURE BLANCHE

Si tu as 3 fois deuxX étoiles, tu obtiens la ceinture blanche.

1

$46 + 36$

$153 + 39$

$621 + 194$




2

$53 + 82$

$231 + 464$

$324 + 49$




3

$67 + 64$

$64 + 528$

$321 + 553$





CEINTURE BLANCHE


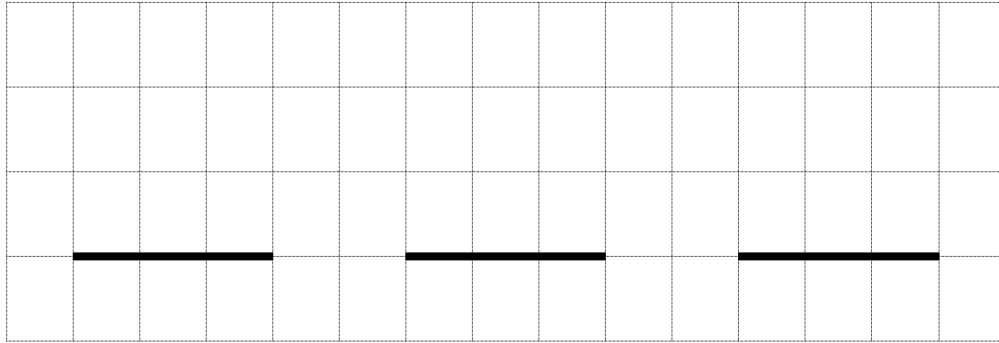
Si tu as 3 fois deuxX étoiles, tu obtiens la ceinture blanche.

4

$57 + 17$

$46 + 126$

$264 + 391$

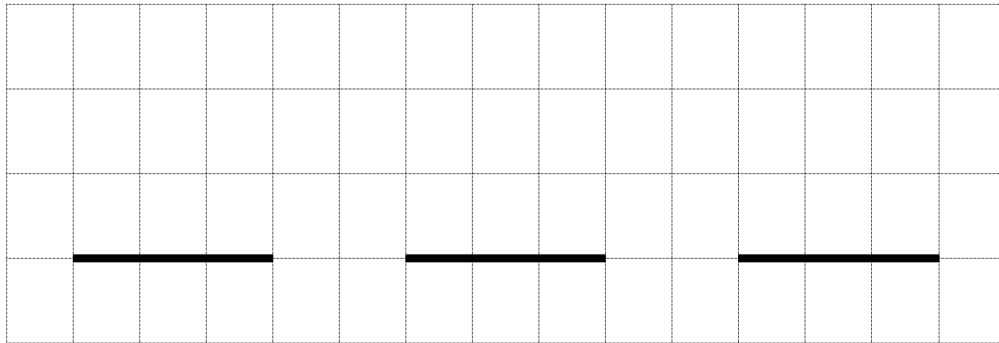


5

$52 + 54$

$180 + 317$

$503 + 57$

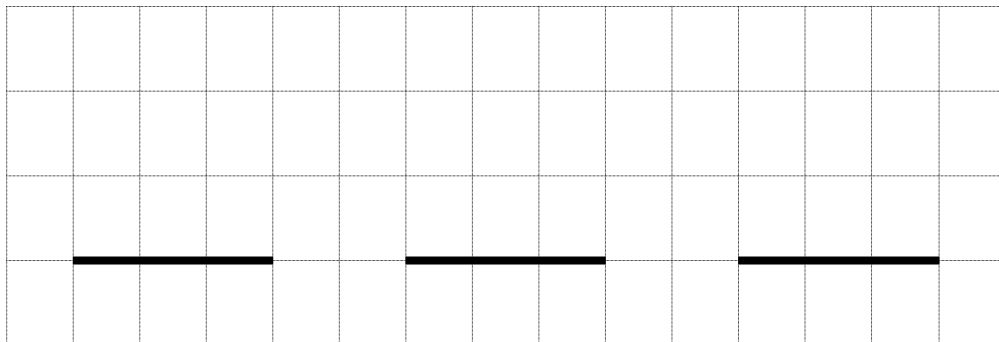


6

$48 + 84$

$644 + 53$

$782 + 154$





CEINTURE BLANCHE


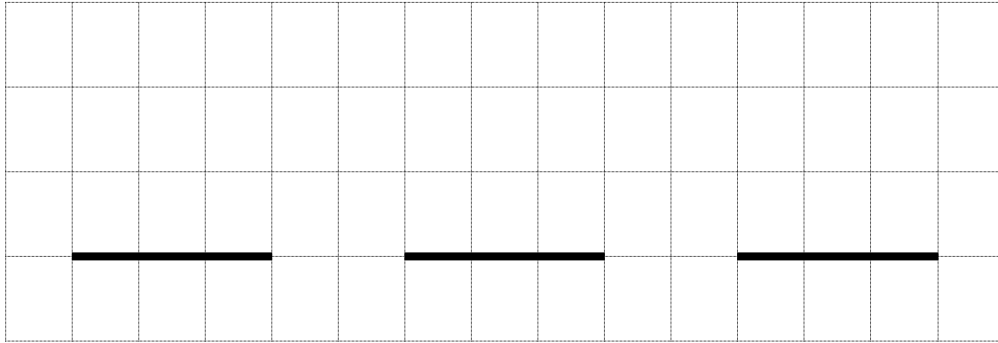
Si tu as 3 fois deux étoiles, tu obtiens la ceinture blanche.

7

$62 + 29$

$305 + 53$

$176 + 274$


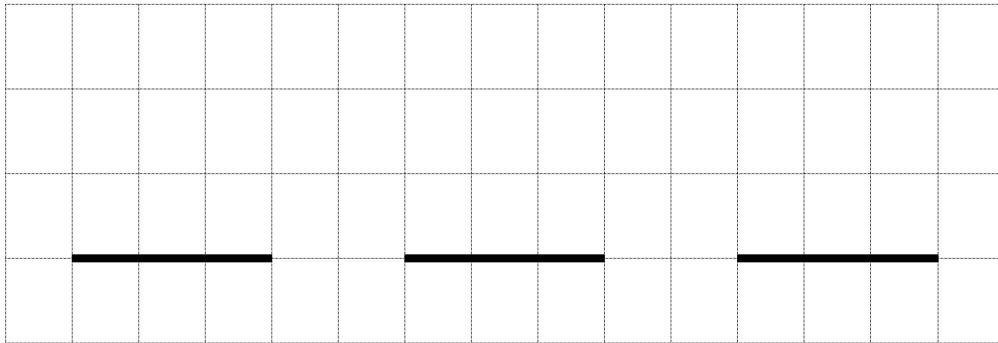


8

$64 + 84$

$374 + 271$

$360 + 29$

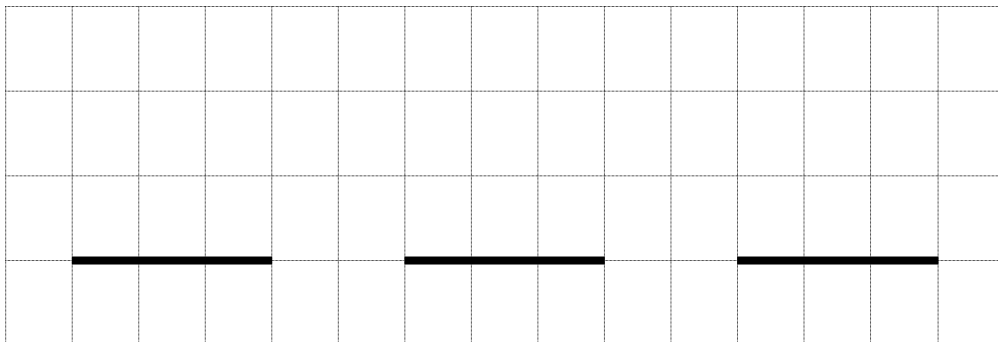


9

$83 + 87$

$49 + 237$

$154 + 452$





CEINTURE JAUNE


Si tu as 3 fois deux étoiles, tu obtiens la ceinture jaune.

1

$184 - 51$

$563 - 432$

$927 - 624$



2

$593 - 80$

$750 - 240$

$846 - 731$




3

$671 - 431$

$465 - 365$

$817 - 703$





CEINTURE JAUNE


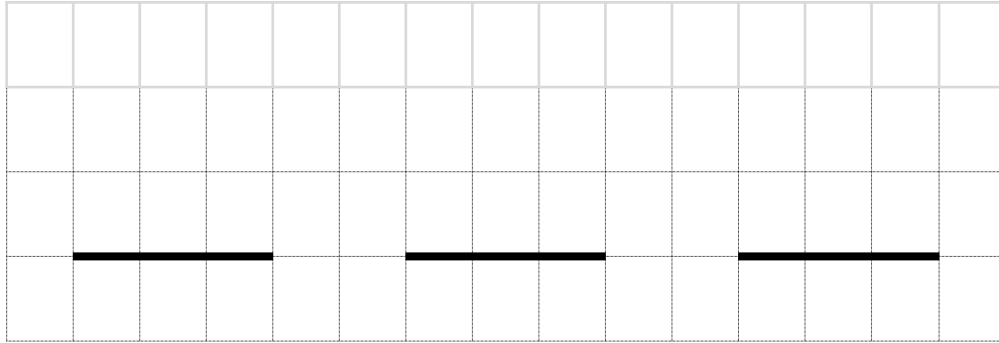
Si tu as 3 fois deux étoiles, tu obtiens la ceinture jaune.

4

$642 - 331$

$851 - 40$

$781 - 560$




5

$268 - 47$

$298 - 78$

$652 - 411$

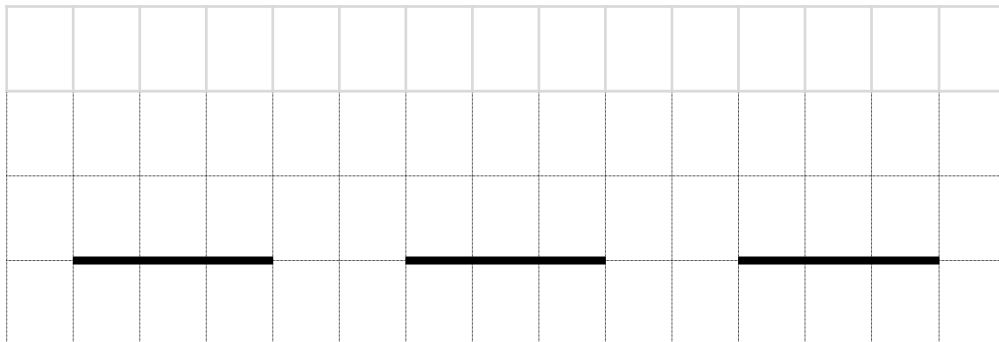


6

$957 - 314$

$566 - 425$

$782 - 151$





CEINTURE JAUNE


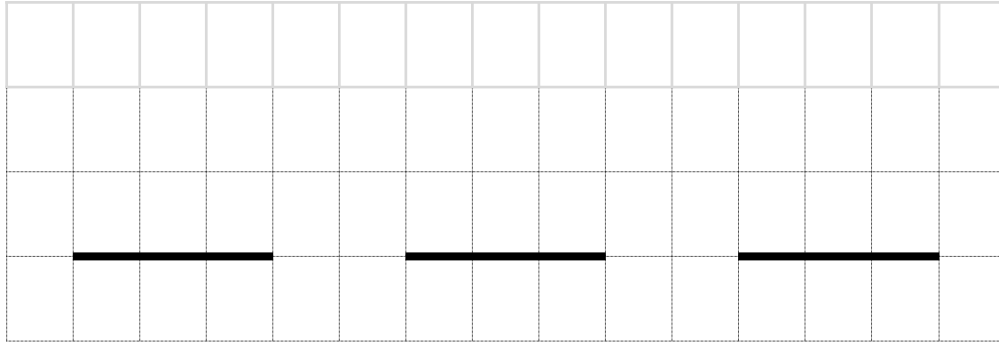
Si tu as 3 fois deuxX étoiles, tu obtiens la ceinture jaune.

7

$189 - 72$

$308 - 204$

$527 - 402$

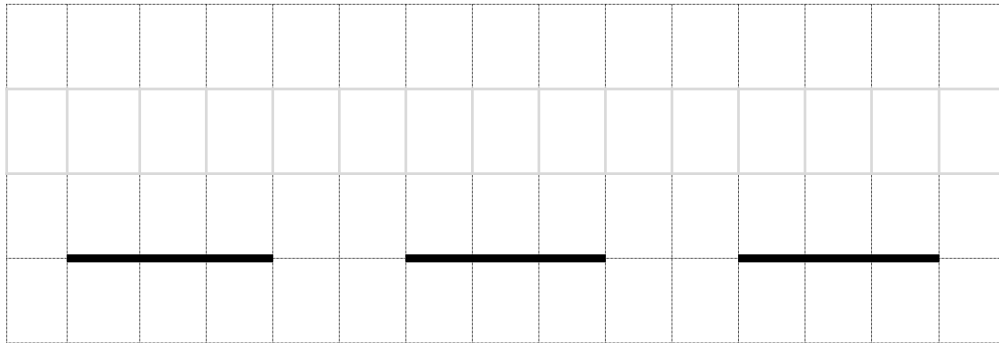


8

$628 - 324$

$846 - 203$

$457 - 216$

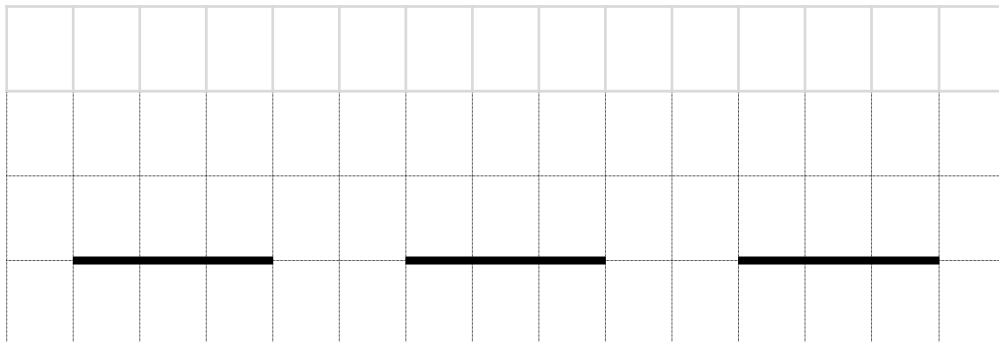


9

$478 - 352$

$965 - 744$

$854 - 123$





CEINTURE ORANGE


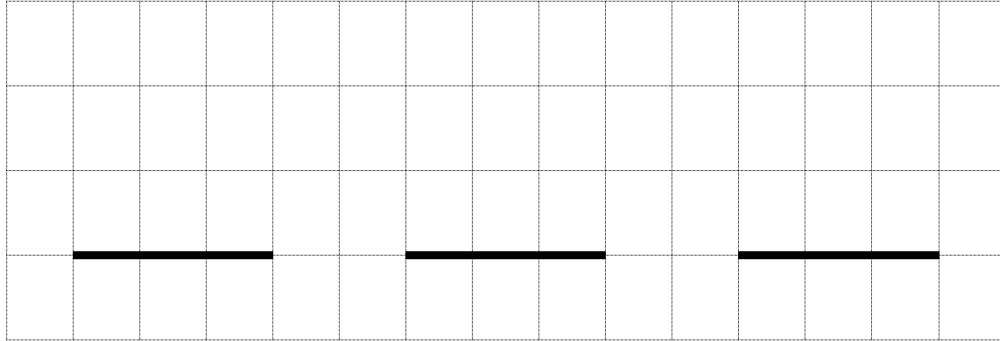
Si tu as 3 fois deux étoiles, tu obtiens la ceinture orange.

1

$485 - 159$

$259 - 86$

$354 - 203$

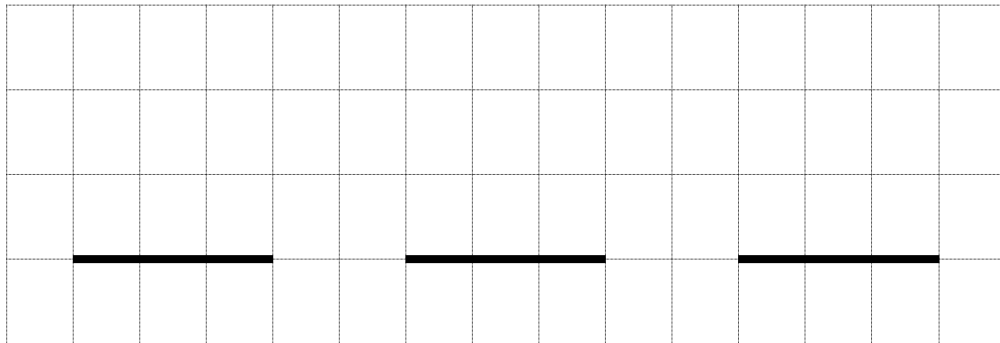


2

$637 - 82$

$289 - 197$

$750 - 236$

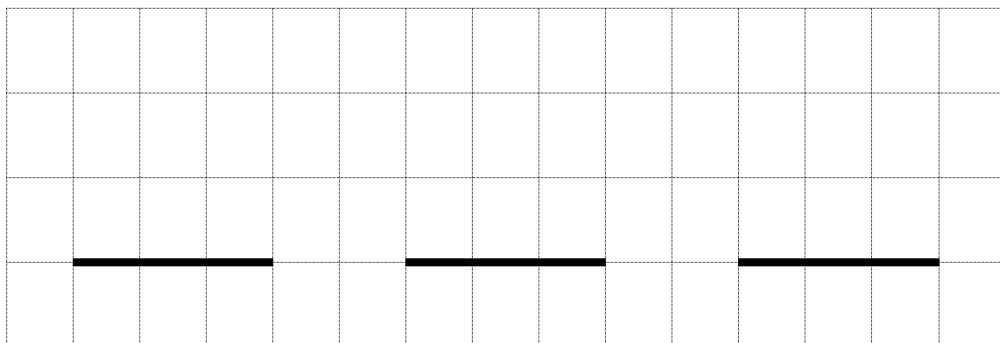


3

$456 - 208$

$369 - 86$

$620 - 110$





CEINTURE ORANGE


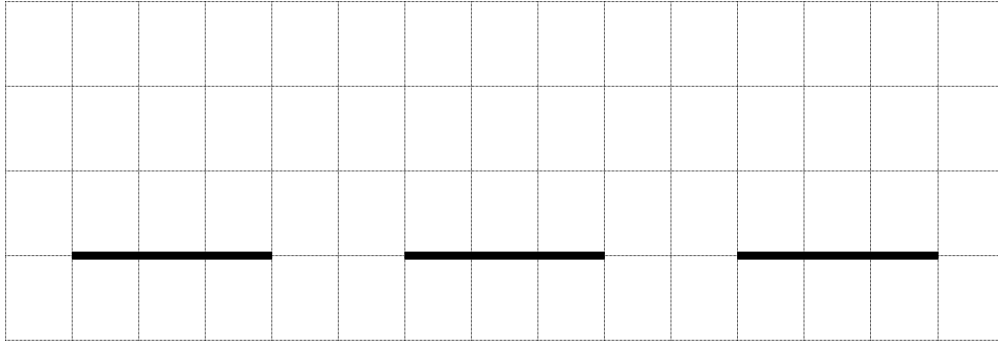
Si tu as 3 fois deux étoiles, tu obtiens la ceinture orange.

4

$368 - 75$

$461 - 80$

$509 - 426$

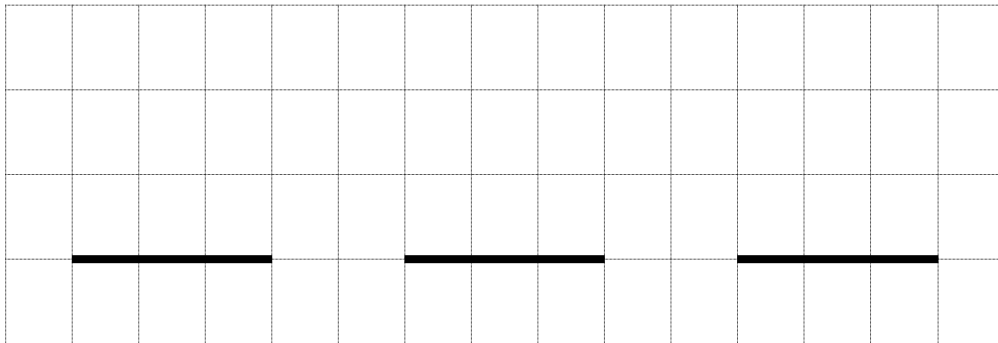


5

$698 - 352$

$256 - 34$

$405 - 123$

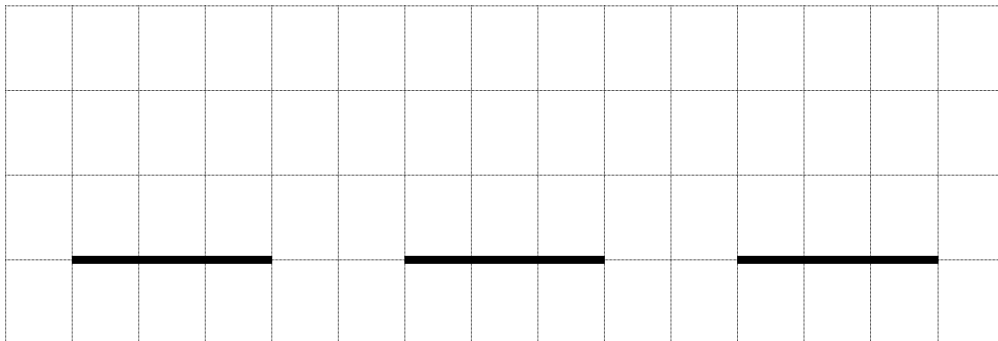


6

$586 - 96$

$485 - 192$

$279 - 128$





CEINTURE ORANGE


Si tu as 3 fois deux étoiles, tu obtiens la ceinture orange.

7

$625 - 410$

$362 - 82$

$256 - 172$



8

$534 - 526$

$926 - 403$

$345 - 34$



9

$603 - 123$

$584 - 66$

$652 - 125$





CEINTURE VERTE


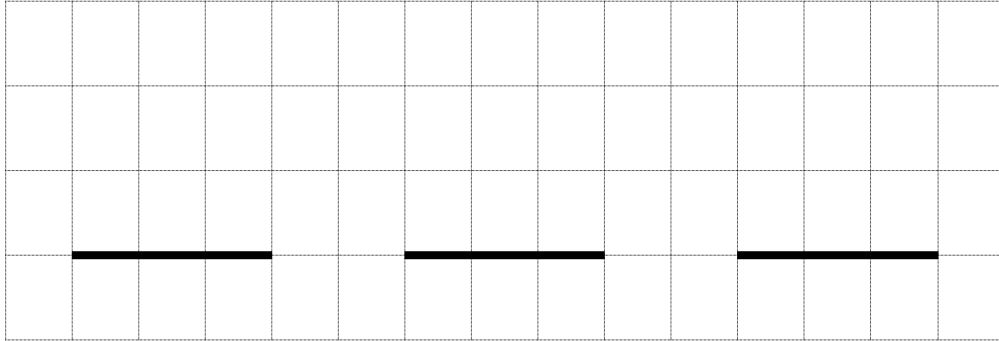
Si tu as 3 fois deux étoiles, tu obtiens la ceinture verte.

1

$485 + 159$

$308 - 85$

$354 + 208$

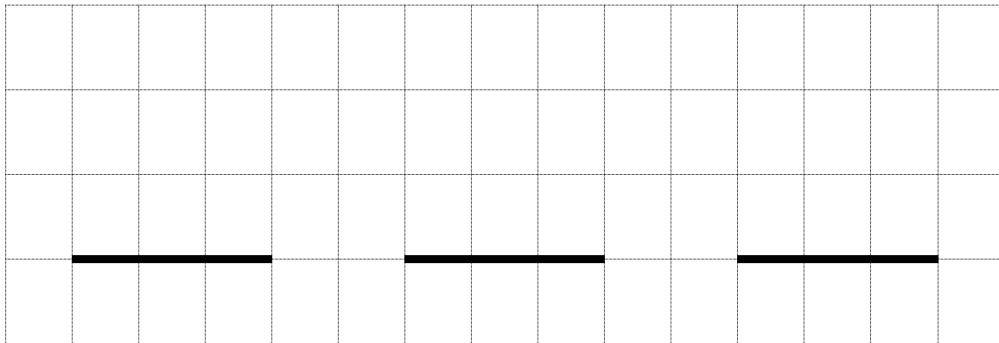


2

$581 - 42$

$289 + 197$

$705 - 358$


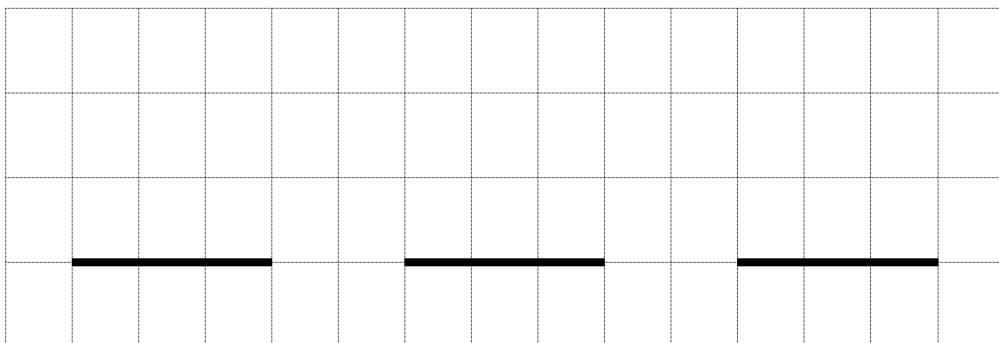


3

$456 + 208$

$742 - 78$

$620 + 192$





CEINTURE VERTE


Si tu as 3 fois deux étoiles, tu obtiens la ceinture verte.

4

$368 + 75$

$320 - 96$

$509 + 426$



5

$698 + 352$

$457 - 296$

$405 + 123$




6

$603 - 121$

$485 + 192$

$662 - 75$





CEINTURE VERTE


Si tu as 3 fois deux étoiles, tu obtiens la ceinture verte.

7

$625 + 410$

$520 - 75$

$256 + 172$



8

$407 - 47$

$926 + 403$

$459 - 285$




9

$603 + 123$

$741 - 189$

$652 + 125$





CEINTURE BLEUE


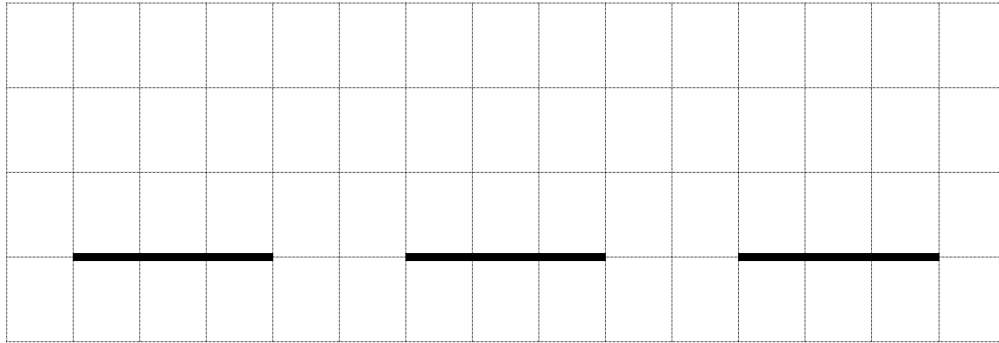
Si tu as 3 fois deux étoiles, tu obtiens la ceinture bleue.

1

243×2

132×4

111×5

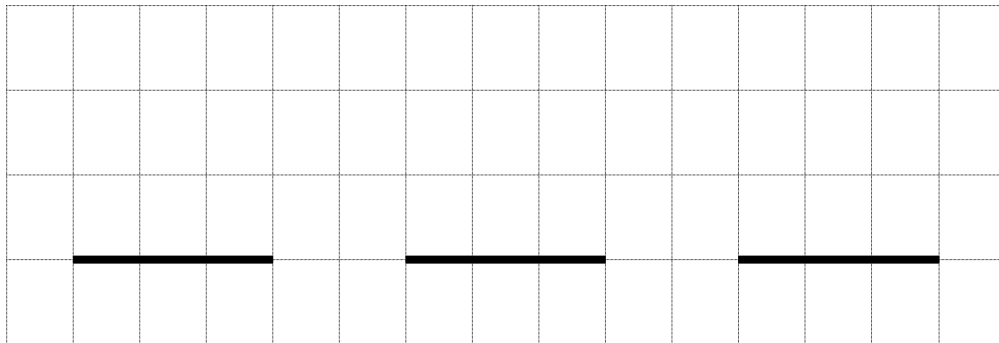


2

345×3

701×7

462×6

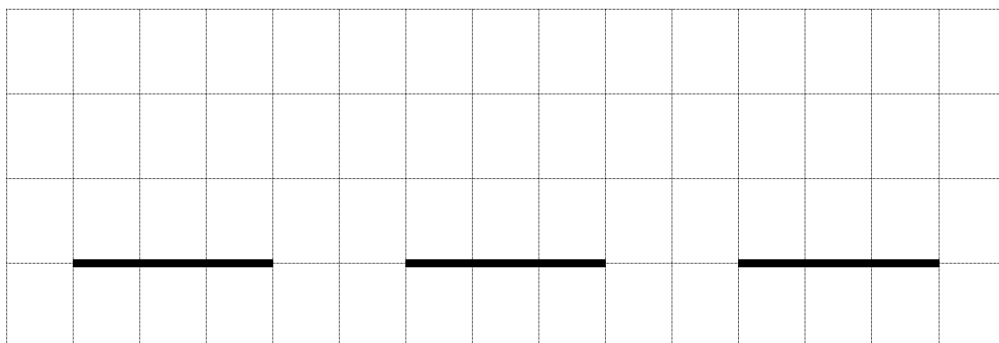


3

790×8

935×9

248×4





CEINTURE BLEUE


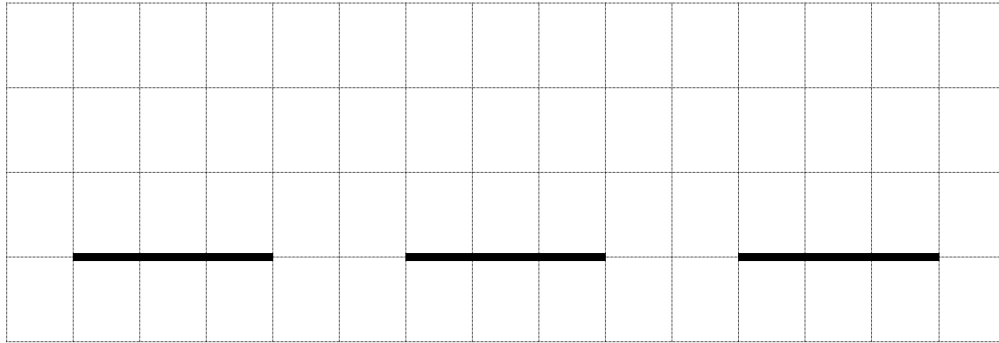
Si tu as 3 fois deux étoiles, tu obtiens la ceinture bleue.

4

685×2

304×4

867×5

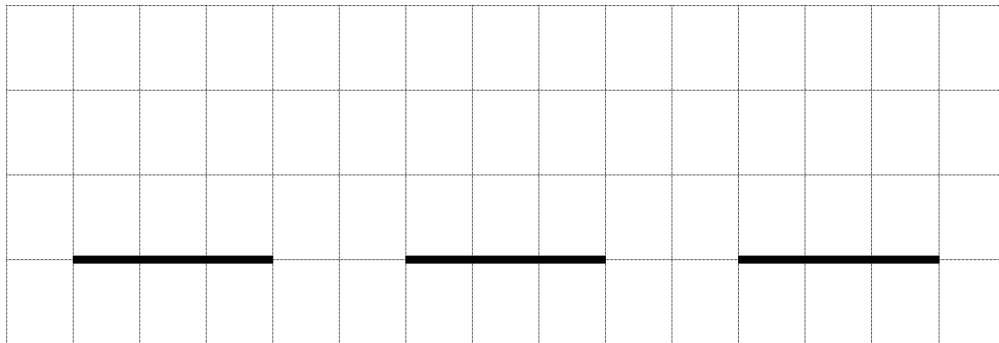


5

267×3

125×7

360×6

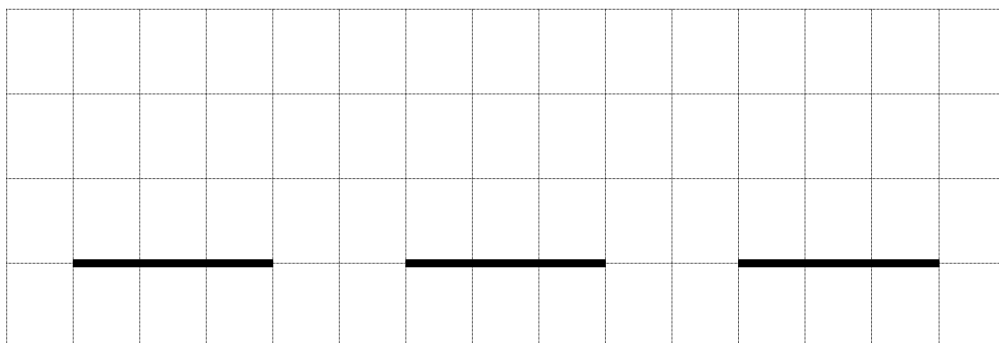


6

342×8

545×9

248×7





CEINTURE BLEUE


Si tu as 3 fois deux étoiles, tu obtiens la ceinture bleue.

7

894×2

675×4

608×5



8

759×3

540×7

123×6



9

318×8

637×9

456×6





CEINTURE MARRON

Si tu as 3 fois deux étoiles, tu obtiens la ceinture marron.

7

354×51

683×42

714×53



8

456×72

987×36

321×54



9

852×19

147×52

369×31





CEINTURE NOIRE


Si tu as 3 fois deux étoiles, tu obtiens la ceinture noire.

1

$506 - 483$

352×58

$846 + 329$



2

$492 - 57$

$249 + 384$

753×47



3

$329 + 97$

629×69

$708 - 98$





CEINTURE NOIRE


Si tu as 3 fois deux étoiles, tu obtiens la ceinture noire.

4

$852 - 637$

408×49

$429 + 259$



5

$753 - 409$

$851 + 425$

725×53



6

$454 + 729$

548×96

$193 - 76$





CEINTURE NOIRE


Si tu as 3 fois deuxX étoiles, tu obtiens la ceinture noire.

7

$846 - 329$

632×43

$429 + 95$



8

$369 - 78$

$469 + 530$

249×76



9

$352 + 487$

473×52

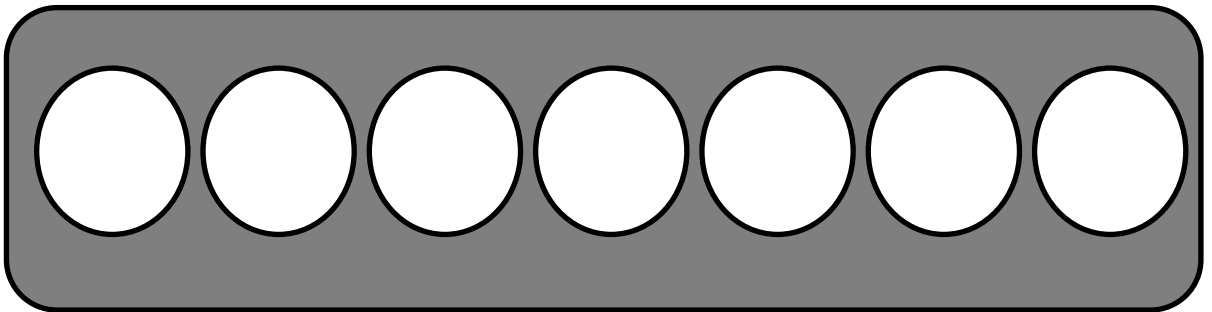
$535 - 263$



DIPLÔME DE CALCUL POSE

Décerné à _____

Pour avoir validé les ceintures suivantes :

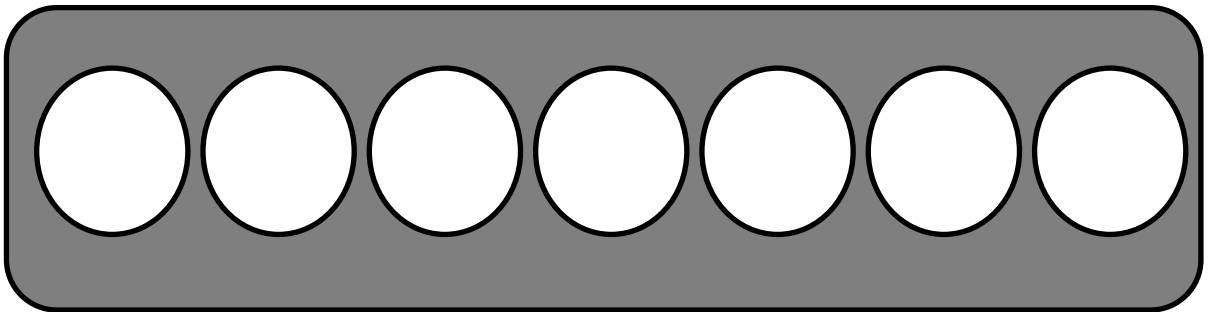


La maîtresse

DIPLÔME DE CALCUL POSE

Décerné à _____

Pour avoir validé les ceintures suivantes :



Le maître

