

1 Calcule :



$2 \times 10 = \dots$	$2 \times 3 = \dots$	$2 \times 2 = \dots$
$2 \times 0 = \dots$	$2 \times 8 = \dots$	$2 \times 4 = \dots$
$2 \times 7 = \dots$	$2 \times 9 = \dots$	$2 \times 5 = \dots$

5 Calcule :



$3 \times 10 = \dots$	$3 \times 3 = \dots$	$3 \times 2 = \dots$
$3 \times 0 = \dots$	$3 \times 8 = \dots$	$3 \times 4 = \dots$
$3 \times 7 = \dots$	$3 \times 9 = \dots$	$3 \times 5 = \dots$

2 Complète :




$2 \times \dots = 0$	$\dots \times \dots = 20$	$\dots \times \dots = 10$
$2 \times \dots = 18$	$2 \times \dots = 6$	$2 \times \dots = 14$
$2 \times \dots = 8$	$2 \times \dots = 12$	$2 \times \dots = 4$

6 Complète :




$3 \times \dots = 0$	$\dots \times \dots = 30$	$\dots \times \dots = 15$
$3 \times \dots = 18$	$3 \times \dots = 6$	$3 \times \dots = 9$
$3 \times \dots = 3$	$3 \times \dots = 21$	$3 \times \dots = 12$

3 Calcule :




$5 \times 2 = \dots$	$5 \times 3 = \dots$	$5 \times 10 = \dots$
$5 \times 4 = \dots$	$5 \times 8 = \dots$	$5 \times 0 = \dots$
$5 \times 5 = \dots$	$5 \times 9 = \dots$	$5 \times 7 = \dots$

7 Calcule :




$4 \times 10 = \dots$	$4 \times 2 = \dots$	$4 \times 3 = \dots$
$4 \times 0 = \dots$	$4 \times 4 = \dots$	$4 \times 8 = \dots$
$4 \times 7 = \dots$	$4 \times 5 = \dots$	$4 \times 9 = \dots$

4 Complète :



$5 \times \dots = 30$	$\dots \times \dots = 50$	$\dots \times \dots = 10$
$5 \times \dots = 45$	$5 \times \dots = 25$	$5 \times \dots = 15$
$5 \times \dots = 20$	$5 \times \dots = 35$	$5 \times \dots = 40$

8 Complète :



$4 \times \dots = 0$	$\dots \times \dots = 20$	$\dots \times \dots = 40$
$4 \times \dots = 8$	$4 \times \dots = 36$	$4 \times \dots = 28$
$4 \times \dots = 16$	$4 \times \dots = 24$	$4 \times \dots = 12$

1 Les tables du 2 et du 5. Calcule :



$2 \times 9 = \dots$	$5 \times 3 = \dots$	$5 \times 1 = \dots$
$5 \times 0 = \dots$	$5 \times 8 = \dots$	$2 \times 7 = \dots$
$2 \times 8 = \dots$	$2 \times 10 = \dots$	$5 \times 5 = \dots$

5 Les tables du 2, 3 et 4. Calcule :



$3 \times 4 = \dots$	$4 \times 8 = \dots$	$4 \times 10 = \dots$
$4 \times 0 = \dots$	$3 \times 8 = \dots$	$9 \times 4 = \dots$
$4 \times 7 = \dots$	$2 \times 9 = \dots$	$2 \times 5 = \dots$

2 Les tables du 2 et du 5. Complète :



$2 \times \dots = 10$	$\dots \times \dots = 16$	$\dots \times \dots = 25$
$5 \times \dots = 20$	$2 \times \dots = 18$	$2 \times \dots = 14$
$2 \times \dots = 12$	$5 \times \dots = 30$	$5 \times \dots = 45$

6 Les tables du 2, 3 et 4. Complète :



$4 \times \dots = 12$	$\dots \times \dots = 40$	$\dots \times \dots = 24$
$4 \times \dots = 20$	$3 \times \dots = 18$	$4 \times \dots = 16$
$2 \times \dots = 18$	$2 \times \dots = 12$	$3 \times \dots = 9$

3 Les tables du 3 et du 5. Calcule :



$5 \times 3 = \dots$	$4 \times 5 = \dots$	$5 \times 10 = \dots$
$3 \times 4 = \dots$	$3 \times 8 = \dots$	$3 \times 0 = \dots$
$3 \times 3 = \dots$	$5 \times 5 = \dots$	$3 \times 7 = \dots$

7 Les tables du 2, 3, 4 et 5. Calcule :



$3 \times 10 = \dots$	$3 \times 2 = \dots$	$4 \times 3 = \dots$
$4 \times 5 = \dots$	$4 \times 8 = \dots$	$5 \times 9 = \dots$
$3 \times 7 = \dots$	$3 \times 5 = \dots$	$3 \times 9 = \dots$

4 Les tables du 3 et du 5. Complète :



$5 \times \dots = 35$	$\dots \times \dots = 30$	$\dots \times \dots = 50$
$3 \times \dots = 12$	$5 \times \dots = 40$	$5 \times \dots = 30$
$3 \times \dots = 24$	$3 \times \dots = 27$	$3 \times \dots = 18$

8 Les tables du 2, 3, 4 et 5. Complète :



$2 \times \dots = 12$	$\dots \times \dots = 50$	$\dots \times \dots = 30$
$3 \times \dots = 21$	$5 \times \dots = 35$	$3 \times \dots = 27$
$4 \times \dots = 40$	$4 \times \dots = 16$	$2 \times \dots = 18$